



1 Which number is **bigger**?

a) 9 b) 5


2 Which number is **smaller**?


a) 10 b) 4

3 Which number is **smaller**?


a) 4 b) 6


4 Which group has **more**?

a) 

b) 

5 Which group has **more**?

a) 

b) 

SAMPLE
Please register/login to get full pdf access

6 Which group has **more**?



7 Which number is **bigger**?

a) 7

b) 1

8 Which number is **bigger**?

a) 8

b) 5