


1 Which group shows 7 fruits?

$$5 + 2 = 7$$



2 Which group shows 6 fruits?

$$1 + 5 = 6$$



3 How do you make 7?

- a) $7 + 1$ b) $3 + 4$ c) $1 + 7$

4 Which group shows 6 fruits?


$$2 + 4 = 6$$






5 Which group shows 3 fruits?

$1 + 2 = 3$

a) 

b) 

6 Add:

$5 + 1 = \underline{\quad}$

7 Which group shows 4 animals?

$2 + 2 = 4$

a) 

b) 

8 Add:

$2 + 2 = \underline{\quad}$