

1 How do you write this number using digits?

eighty-two

- a) 84 b) 82 c) 80

2 When counting by **twos**, what comes after 64?

3 Which picture shows 5 pears?

a)




b)



4

How many pears are there?



5

How do you write this number using digits?

eighty


a) 82

b) 78


c) 80

6 Which picture shows 18 pears?

a)



b)



7 Counting **up** from 34 which number comes next?

8 When counting by **tens**, what comes after 20?
